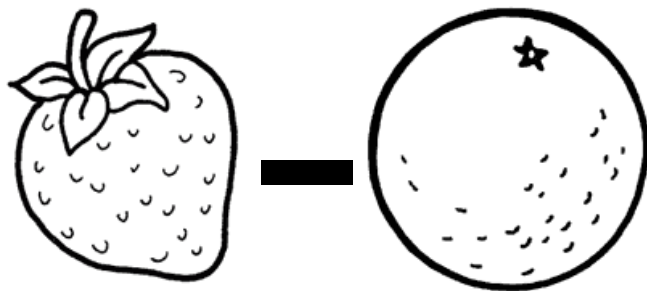



A strawberry with three leaves and a stem is positioned to the left of an orange with a small star on its stem. Both are drawn in a simple, black-and-white line-art style.

$$+ = 8$$




A strawberry with three leaves and a stem is positioned to the left of an orange with a small star on its stem. Both are drawn in a simple, black-and-white line-art style.


$$- = 2$$



A large, bold black question mark is positioned to the left of the equations below.



A strawberry with three leaves and a stem, drawn in a simple, black-and-white line-art style.

$$=$$


An orange with a small star on its stem, drawn in a simple, black-and-white line-art style.

$$=$$